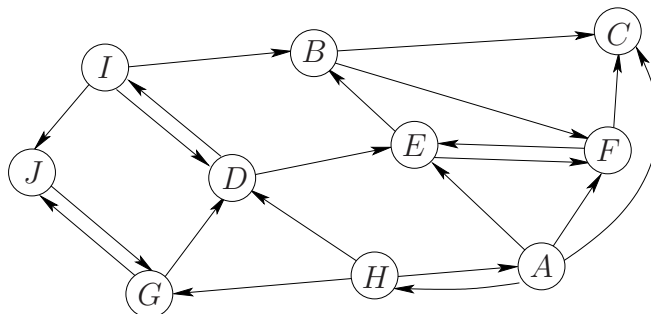


Total possible marks: 100. You have to submit this homework to a TA due Dec. 6 at the beginning of the lecture. Homeworks must be done in groups of up to 3 students (one submission per group, listing materials consulted). This set covers chapters 22–24 of the textbook *Introduction to Algorithms*, 3rd. ed., by Cormen et al.

Exercise 1: breadth-first search (20 points).

- (8 points) The breadth-first search algorithm of p. 595 explores only vertices reachable from a given starting vertex. Modify it as in the DFS algorithm of p. 604 to explore all vertices.
- (6 points) Modify this BFS pseudocode into a BFS-CONNECTED-COMPONENTS(G) algorithm that finds all the connected components of an undirected graph G (represented by adjacency lists). *Hint:* see exercise 22.3-12 for undirected connected components with depth-first search.
- (6 points) Give the running time of BFS-CONNECTED-COMPONENTS(G).

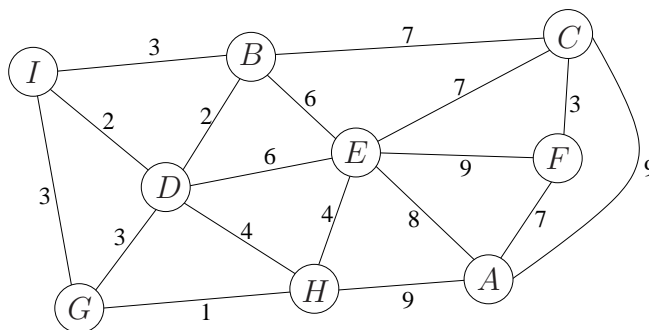
Exercise 2: depth-first search, topological sort and strongly connected components (35 points). Consider the following directed graph $G = (V, E)$:



- (3 points) Draw the adjacency-list representation of G as in fig. 22.2, with each list sorted in increasing alphabetical order.
- (2 points) Give the adjacency matrix of G .
- (5 points) Draw the graph, the adjacency-list representation (with each list sorted in increasing alphabetical order), and the adjacency matrix for the transpose graph G^T .
- (8 points) Do depth-first search in G , considering vertices in increasing alphabetical order. Show the final result, with vertices labeled with their starting and finishing times, and edges labeled with their type (T/B/F/C) as in fig. 22.5(a).
- (8 points) Based on your results, proceed to run the algorithm in p. 617 to find the strongly connected components of G (show the result of the DFS in G^T , with vertices labeled with their starting and finishing times).
- (4 points) Draw the component graph G^{SCC} of G . Is it a dag/tree/forest/none of these?

7. (5 points) Find a topological sort of G^{SCC} using the algorithm in p. 613 (label each vertex with its DFS finishing time).

Exercise 3: minimum spanning trees (20 points). Consider the following weighted undirected graph:

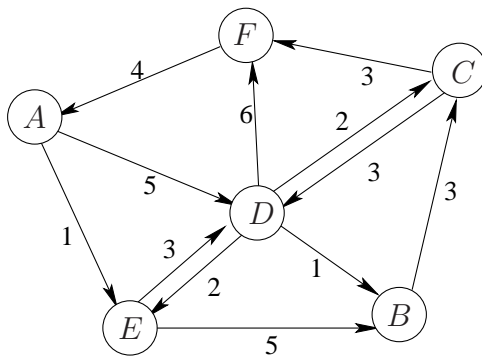


Show the minimum spanning tree obtained by:

1. (10 points) Kruskal's algorithm.
2. (10 points) Prim's algorithm using A as initial vertex.

Do not show any intermediate stages (as in figs. 23.4 or 23.5), just show the final MST. However, for each algorithm, show the list of MST edges in the order selected by the algorithm, e.g. (B, D) , (E, A) , (E, B) , etc.

Exercise 4: shortest paths (25 points). Consider the following weighted directed graph:



1. (13 points) Show the intermediate stages of Dijkstra's algorithm as in fig. 24.6 to find the single-source shortest paths starting from vertex A .
2. (12 points) Consider the same graph but ignoring the weights. Use breadth-first search starting from vertex A to label each vertex with its shortest distance (in number of edges) from A , and mark the edges in the BFS tree. Do not show any intermediate results (as in fig. 22.3 in the book), just show the final BFS tree, labelling the nodes with the shortest-path distances. Also, show the contents of the BFS queue just before B is enqueued.

Bonus exercise 1: minimum spanning trees (10 points). (Exercise 23.1-1 in the text-book.) Let (u, v) be a minimum-weight edge in a connected graph G . Show that (u, v) belongs to some minimum spanning tree of G . *Hint:* consider theorem 23.1 and corollary 23.2.

Bonus exercise 2: minimum spanning trees (15 points). (Exercise 23.2-2 in the text-book.) Suppose that we represent the graph $G = (V, E)$ as an adjacency matrix. Give a simple implementation of Prim's algorithm for this case that runs in $\mathcal{O}(V^2)$ time.